


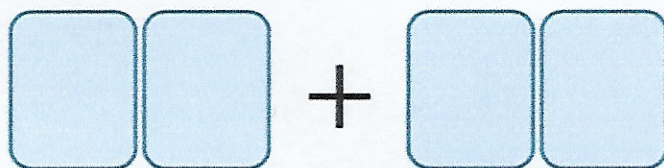
Challenge 3

Danni has these four digit cards.



Danni uses all four cards to make two 2-digit numbers.


She then adds the two numbers together.



What is the greatest total she can make?

Challenge 4

Sonny buys 2 pencils and 3 rulers.



Each pencil costs 69p.

Sonny pays with a £5 note and receives £1.07 change.

How much does a ruler cost?