
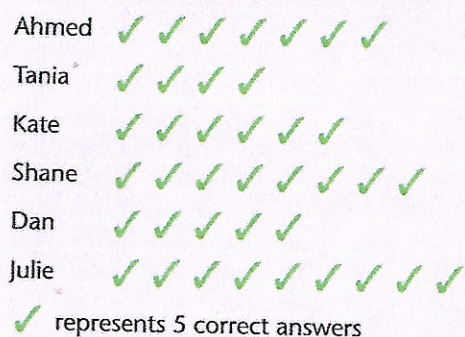


B

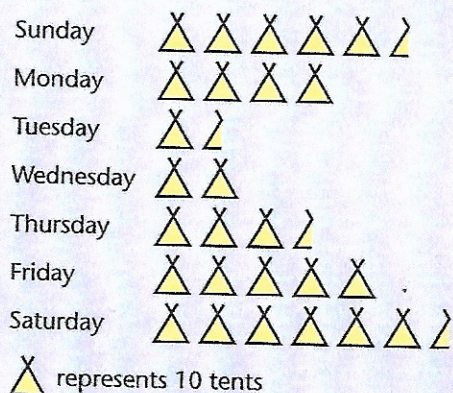
Six children took part in a general knowledge quiz. There were 50 questions altogether. This pictogram shows how many each child answered correctly.



- 1 Who got the most questions right?
- 2 Who answered the least number of questions correctly?
- 3 How many questions were answered correctly by:
 - a) Shane
 - b) Dan?
- 4 Who got:
 - a) 30 questions right
 - b) 45 questions right?
- 5 How many more did Ahmed answer correctly than Tania?
- 6 How many less questions did Dan get right than Julie?
- 7 How many questions were answered wrongly by:
 - a) Ahmed
 - b) Tania?

C

This pictogram shows the number of tents at a campsite each day in one week in August.



- 1 On which day was there:
 - a) the largest number of tents
 - b) the smallest number of tents?
- 2 On which day were there:
 - a) 15 tents
 - b) 40 tents?
- 3 How many tents were there on:
 - a) Wednesday
 - b) Sunday?
- 4 How many more tents were there on Monday than on Tuesday?
- 5 How many fewer tents were there on Friday than on Saturday?
- 6 The campsite fee for a tent pitch is £10 per night. How much was taken in site fees during the week?