


Group the dots. Counts the groups. Fill in the boxes.


A

Group in 3s.



$$\boxed{15} \div 3 = \boxed{5}$$

Group in 5s.




$$\boxed{} \div 5 = \boxed{}$$

Group in 2s.



$$\boxed{} \div 2 = \boxed{}$$


Group in 4s.



$$\boxed{} \div 4 = \boxed{}$$


B

Group in 2s.




$$\boxed{} \div 2 = \boxed{}$$

Group in 3s.




$$\boxed{} \div 3 = \boxed{}$$

Group in 4s.



$$\boxed{} \div 4 = \boxed{}$$

Group in 6s.



$$\boxed{} \div 6 = \boxed{}$$

C

Fill in the boxes.

40 counters.

groups of 2

groups of 5

groups of 10

groups of 20

groups of 8

24 books

piles of 2

piles of 3

piles of 4

piles of 6

piles of 8

60p

£1

2ps

50ps

5ps

20ps

10ps

10ps

20ps

5ps

1ps

2ps