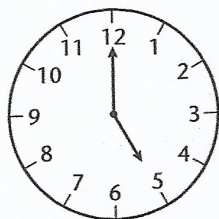


A

Write the time one hour:

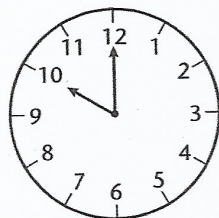
earlier



later

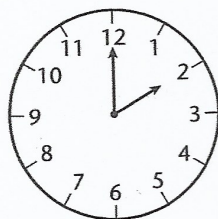
4 o'clock

earlier



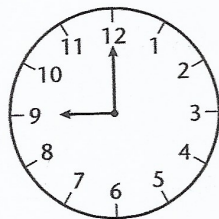
later

earlier



later

earlier

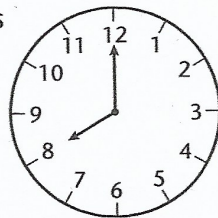


later

B

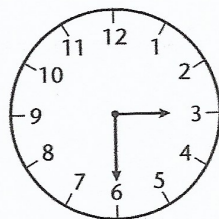
Write the time:

30 minutes earlier



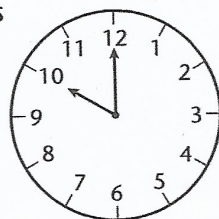
30 minutes later

1 hour earlier



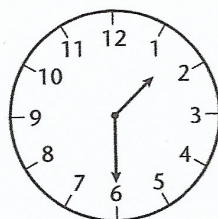
1 hour later

30 minutes earlier



1 hour later

1 hour earlier



1 hour later

C

The time is quarter past 3.

Write the time:

30 minutes later

1 hour earlier

45 minutes later

15 minutes earlier

The time is quarter to 1.

Write the time:

30 minutes earlier

1 hour later

45 minutes earlier

15 minutes later