


A


Use a ruler.

Draw these shapes using the grid lines.


rectangle
sides 4 cm, 2 cm



square
sides 3 cm



rectangle
sides 4 cm \times 3 cm


B

Use a set square or page corner to draw quarter turns.

Draw these shapes.

rectangle 5 cm by 3 cm

square 4 cm by 4 cm

rectangle 2 cm by 6 cm

C

Draw these shapes accurately.

rectangle
4.5 cm by 5.5 cm

square
3.5 cm by 3.5 cm

rectangle
5.5 cm by 2.5 cm