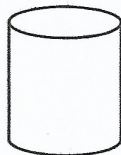
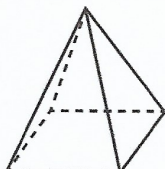


A



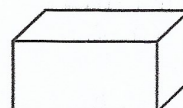
B



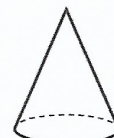
C



D




E



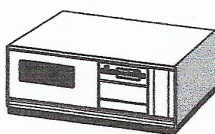
F

A

Which shape?



C



B

cone

cylinder

cube

pyramid

cuboid

sphere

Write the name of the above shapes A - F.

A *cube*

B

C

D

E

F

These shapes have straight edges only.

..... *cube*

.....

.....

.....

These shapes have curved faces.

.....

.....

.....

C

Which shape?

6 square faces

A

2 faces that are circles

5 vertices

no edges

one face that is a circle

2 shapes with no vertices

2 shapes with straight edges

2 shapes with curved edges

5 faces