



















A Write the amount.

		<input type="text" value="25"/> p			<input type="text"/>			<input type="text"/>
		<input type="text"/>			<input type="text"/>			<input type="text"/>
		<input type="text"/>			<input type="text"/>			<input type="text"/>

B Make the amounts. Use the number of notes and coins shown.

£25

£10.70

£40

£21.50

£35

£7.05

C Make the amounts. Use the number of notes and coins shown.

£30.25

£15.60

£25.11

£10.56

£5.45

£20.17

