

Sheet 55 MEASURING CAPACITY

55

A

5 cups fill one jug.
How many cups?



10 jugs fill one bowl.
How many jugs?



2 bowls fill one bucket.
How many bowls?



B


How much is in each flask?




litres




litres




litres




ml




ml



ml



litres




litres




litres

C


Colour in to show amount.




40 ml




40 ml




150 ml




2 litres




500 ml




6 litres



400 ml



200 ml



75 ml