

Sheet 55 MEASURING CAPACITY

55

A

5 cups fill one jug.
How many cups?



10 jugs fill one bowl.
How many jugs?






2 bowls fill one bucket.
How many bowls?



B

How much is in each flask?



C

Colour in to show amount.

